



**Annexure-IV****Classes 3 and 5****Instructions for the Field Investigator**

**(READ these instructions CAREFULLY before beginning the test)**

- Write UDISE School Code, Student's ID, Student's Aadhaar Number, Area Code (Rural-1, Urban-2), School Management (Govt.-1, Govt. aided-2), Student's Gender (Boy-1, Girl-2), Social Group (SC-1, ST-2, OBC-3, General-4), CWSN : LD (Locomotor Disability) – 1; VI (Visual Impairment) – 2; HI (Hearing Impairment) – 3; S&LD (Speech & Language Disability) – 4; ID (Intellectual Disability) – 5; OthD (Other Disabilities) – 6; Student's Name, School's Name, District and State.
- Divide the total number of selected students into **two** groups.
- One test form should be distributed to one group of students.
- **Complete all the entries on the first page before distribution of the test booklet** taking help from the school register/class teacher.
- All entries are mandatory and should be in English only. Write all codes in international numerals, i.e., 1, 2, 3...
- Ensure that all the children are seated comfortably in their respective places.
- Ask the children to take out their pencils and erasers and keep them ready.
- Distribute the test booklet to the children. Tell the children not to open their booklets till it is told to do so.
- Give the following directions to the children **"Find the answer to the question from the options given.**

**Circle the correct option.**

- Do the following example on the board and explain how to mark the answer.

<b>Q. Given the numbers 36, 28, 41 and 59 which is the largest?</b>	
A	36
B	28
<input checked="" type="radio"/> C	59
D	41

- The field investigator should tell the children that they should **Circle only one option as correct.**
- Give the following **Directions to the children, "Look at Question No.1, all of you read silently the given passage."**



1. This road sign says..\_\_\_\_\_.

- 1) No parking    2) No horn    3) No 'U' turn    4) Stop

2. The baby of tiger is.....

- 1) cub    2) calf    3) kid    4) pup

3. The lion lives in

- 1) kennel..    2)den    3) stable    4) shed

4. Find the name of one hidden animal from the grid and choose the correct option.

g	k	e	h
q	g	i	r
b	e	a	r
m	o	i	n

- 1) lion    2) tiger    3) giraffe    4) bear

5. Choose the correct sentence.

- 1) I is a teacher    2) I am a teacher    3) I are a teacher    4) I will a teacher

6. Encircle the correct option.

Dre - -


1) ee

2) ll

3) ss

4) tt

7. See the picture and choose the correct option



1) Coconut tree

2) palm tree

3) Mango tree

4) Arecanut tree

8. Choose the correct synonym for the underlined word.

He is chopping the vegetables.

1) cutting

2) mixing

3) grinding

4) washing

9. Identify the correct adjective.

An Elephant is the ----- animal.

1) big

2) bigger

3) biggest

4) as big as

10. Correct the Rhyming pairs.

1) vain , rain

2) make, grey

3) cake , pray

4) lake, way

11. Encircle the correct option. fulfi \_\_\_\_\_

1) e e

2) ll

3) s s

4) tt

12. Find out the noun.

1) kala

2) looks

3) beautiful

4) today

Choose the correct synonyms for underlined word.

13. Apple is my favourite fruit.

1) hate

2) loved

3) known

4) familiar

14. Circle the correct rhyming pair.

1) kind, see

2) tall, ball

3) find , bee

4) tall, talk

15. She opened the .... and filled the bucket with water.


1) tape

2) top

3) tap

4) tub

Choose the correct antonym.







# Maths

16. How many "10 bundle sticks packets" formed with 46 sticks  
a) 4                      b) 6                      c) 10                      d) 40                      (     )
17.  $313+31+3 = \dots\dots\dots$   
a) 374                      b) 347                      c) 437                      d) 923                      (     )
18. Balu have 6 marbles. Trimurthy have 9 marbles. How many marbles both have  
a) 13                      b) 14                      c) 15                      d) 16                      (     )
19.  $58 \times 6 = \dots\dots\dots$   
a) 658                      b) 586                      c) 308                      d) 348                      (     )
20. Add  $4 \times 5$  and  $6 \times 5$   
a) 10                      b) 20                      c) 30                      d) 50                      (     )
21. 42 fruits are shared 6 members equally. How many fruits get each one .....  
a) 9                      b) 8                      c) 7                      d) 6                      (     )
22. Which of the following number his between 35 and 39  
a) 34                      b) 37                      c) 33                      d) 32                      (     )
23. How much 103 is less than by 222  
a) 119                      b) 118                      c) 129                      d) 325                      (     )
24. The smaliest three digit number formed with 0,3,1  
a) 103                      b) 130                      c) 013                      d) 311                      (     )
25.  $\square + 76 = 101$   
a) 52                      b) 25                      c) 26                      d) 53                      (     )
26. If we need 4 sticks to form  $\square$  , then how many sticks are required to form  $\square\square$   
a) 8                      b) 10                      c) 7                      d) 9                      (     )
27.  $99+11 = \dots\dots\dots$   
a) 100                      b) 109                      c) 108                      d) 110                      (     )
28. 54,45,39 in these which is biggest number  
a) 49                      b) 39                      c) 45                      d) 54                      (     )
29. A frog can jump 2 feets distance at a time. Then how many times willl be jump 18 feets distance  
a) 7                      b) 2                      c) 9                      d) 8                      (     )
30. In a class lakshman got 116 marks in a exam. in same exam naresh got 97 marks. How many more marks Lakshman got than naresh  
a) 20                      b) 19                      c) 29                      d) 39                      (     )

# EVS

31. What is the lotus leaf of the following ?

- a)  b)  c)  d)  ( )

32. The animal which crawl on the floor is .....

- a) Snake      b) Ant      c) Scolopendra      d) Scorpion      ( )

33. Senior citizens day celebrated on .....

- a) October-1    b) November-1    c) October-2      d) November      ( )

34. Camel call as Desert ship due to .....

- a) it is walking in water    b) Stay in sand      c) Stay in water  
d) Walk easily in sand      ( )

35. Which is donot spread smell of the following

- a) Pudeena    b) spinach    c) Coriander      d) citrus      ( )

36. If we apply the paste of Hibiscus leaves to left palm and Henna paste to right palm and observe after two hours .....

- a) Right palm turns in redish      b) No change in two palm  
c) Two palm turns in reddish      d) Left palm turns in reddish      ( )

37. Which of the following is not feed their young.....

- a) Reptiles    b) Birds      c) Mammals      d) None      ( )

38. What do you call an animal that eats only plants .....

- a) Carnivore    b) Herbivore      c) Omnivore      d) None      ( )





39. Plants sucking water with their .....

- a) Leaves      b) stem      c) Branches      d) Roots      ( )

40. Rangayya has two sons and one daughter, First son and daughter got married. What changes can be occurred in Rangayya family ?

- a) No change      b) Daughter-in-law came and Daughter goes to aunt house  
c) Daughter and son remain in their father home and second son goes aunt home  
d) Daughter in father home-first son goes to aunt home      ( )

41. Which of these tool is the best tool to use when measuring the water depth at the edge of the pond ?

- a)  Net      b)  Binacular      c)  Meter Scale      d)  Beaker      ( )

42. Blowing through a straw will produce a sound. Which straw will make the highest pitch?



43. What do you call the writing system for blind people ?

- a) Leius writing system    b) Braille writing system    c) Charless system  
d) None (    )

44. What is the relation of your brother's sister husband to you....

- a) Brother    b) Young Brother    c) Grand Father    d) Bava

45. What can you do the water drought in summer .....

- a) I cannot use water    b) I save the water  
c) For under ground water I open the inkudu pit    d) None (    )